

- Q1. Select the related word/letters/number from the given alternatives.
 EARTH : PLANET :: MOON : ?
a. SUN **b.** UNIVERSE **c.** VENUS **d.** SATELLITE
- Q2. Select the related word/letters/number from the given alternatives.
 EJOT : _____ :: YDIN : VAFK
a. LQGB **b.** BGLQ **c.** QBGL **d.** BGQL
- Q3. Select the related word/letters/number from the given alternatives.
 100 : 102 :: 100000 : ?
a. 105 **b.** 104 **c.** 1003 **d.** 1004
- Q4. For the following questions. Find the odd word/letters/number pair from the given alternatives
a. Temple **b.** Worship **c.** Mosque **d.** Church
- Q5. For the following questions. Find the odd word/letters/number pair from the given alternatives
a. M N O M **b.** B D C B **c.** X Z Y X **d.** P R Q P
- Q6. For the following questions. Find the odd word/letters/number pair from the given alternatives
a. 70, 80 **b.** 54, 62 **c.** 28, 32 **d.** 21, 24
- Q7. Arrange the following words as per order in the dictionary
 1. Pearl 2. Peasant 3. Pea 4. Peanut
a. 3, 1, 4, 2 **b.** 3, 4, 1, 2 **c.** 1, 3, 2, 4 **d.** 1, 2, 3, 4
- Q8. Which one set of letters when sequentially placed at the gaps in the given letter series shall complete it?
 g f e _ i g _ e i i _ f e i _ g f _ i i
a. i f g i e **b.** f i g i e **c.** e i f g i **d.** i f i g e
- Q9. Which one number when placed at the sign of interrogation shall complete the series
 3, 6, 18, 72, ...?..., 2160
a. 144 **b.** 216 **c.** 288 **d.** 360

Q18. Consider the given statement/s to be true and decide which of the given conclusions / assumptions can definitely be drawn from the given statement.

Statements:

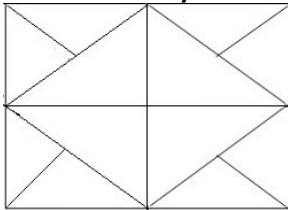
- a. Odisha is still an underdeveloped state.
- b. Problems like poverty, unemployment and illiteracy have not been solved.

Conclusions:

- I. The administration of Orissa is not sensitive enough.
- II. It is the Will of God.

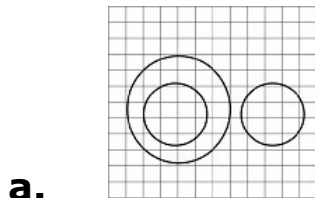
- a. Only I follows
- b. Only II follows
- c. Both I and II follow
- d. Neither I nor II follows

Q19. How many triangles are there in the following figure?

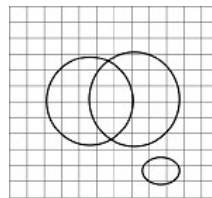


- a. 12
- b. 16
- c. 10
- d. 20

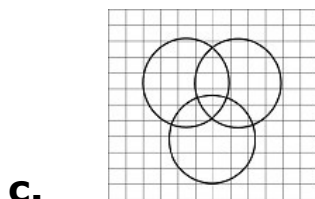
Q20. Which illustrates the relationship amongst Judges, thieves and criminals?



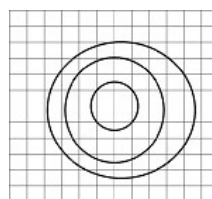
b.



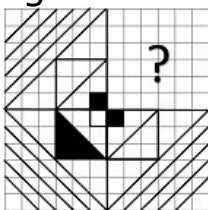
a.

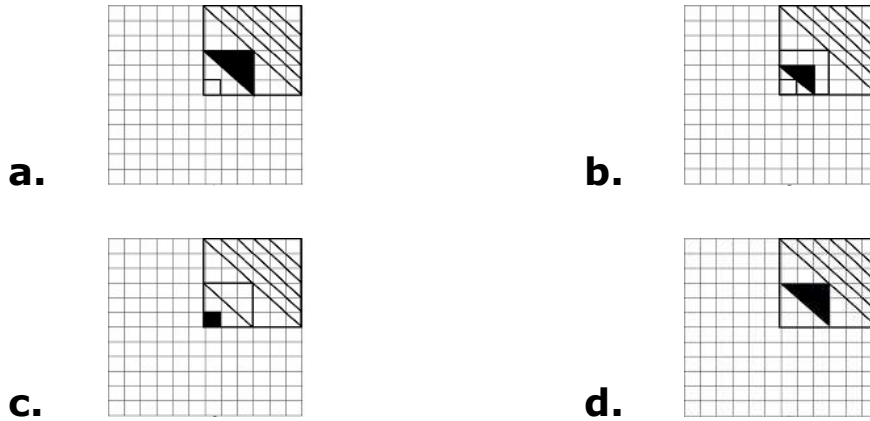


d.

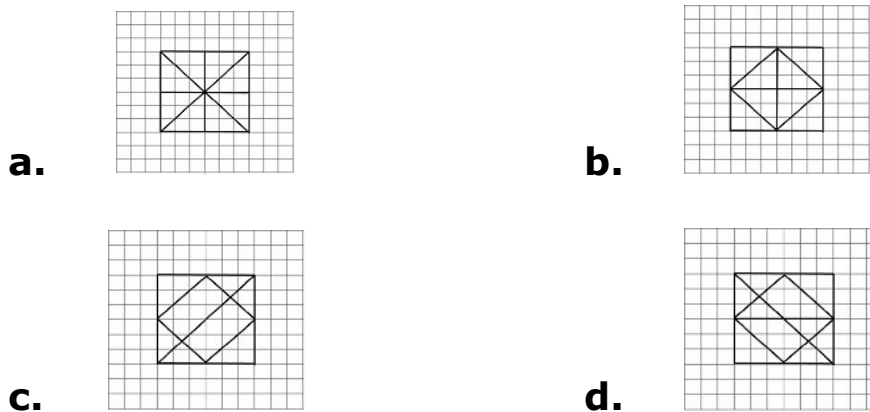
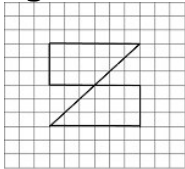


Q21. Which answer figure will complete the pattern in the question figure?

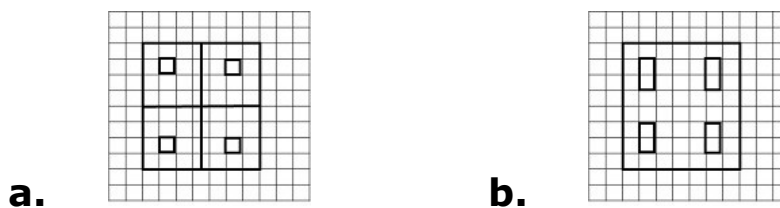
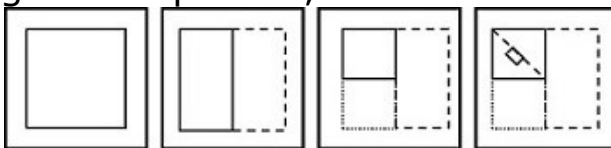


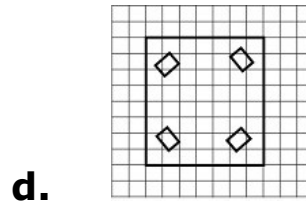
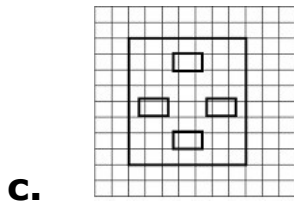


Q22. From the given answer figures, select the one in which the question figure is hidden/embedded?

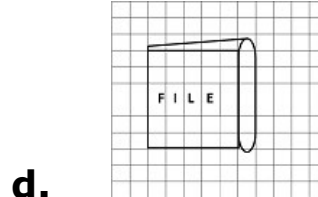
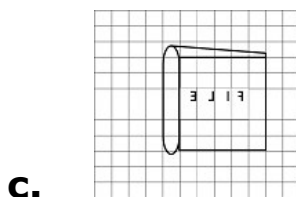
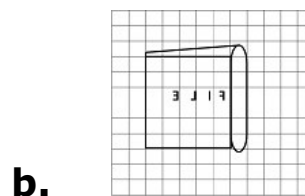
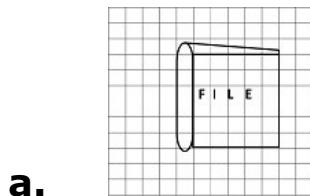
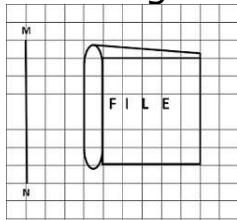


Q23. A piece of paper is folded and punched as shown below. From the given responses, indicate how will it appear when open?





Q24. If a mirror is placed on the line MN, then which of the answer figures is the right image of the given figure?



Q25. In the question, a word is represented by only one set of numbers as given in any one of the alternatives. The sets of numbers given in the alternatives are represented by two classes of alphabets as in two matrices given below. The columns and rows of Matrix I are numbered from 0 to 4 and that of Matrix II are numbered from 5 to 9. A letter from these matrices can be represented first by its row and next by its column, e.g., K can be represented by 00, 24, etc. and A can be represented by 55 etc. You have to identify the set for the word 'SHIP'

| Matrix-I | | | | | | Matrix-II | | | | | |
|----------|---|---|---|---|---|-----------|---|---|---|---|---|
| | 0 | 1 | 2 | 3 | 4 | | 5 | 6 | 7 | 8 | 9 |
| 0 | K | G | E | A | S | 5 | A | H | U | W | N |
| 1 | P | V | H | R | Y | 6 | Y | R | B | T | V |
| 2 | N | V | N | R | K | 7 | O | I | H | B | Q |
| 3 | W | S | B | O | J | 8 | V | O | E | I | S |
| 4 | T | U | A | I | P | 9 | E | T | K | W | P |

a. 31, 56, 43, 10

b. 89, 12, 40, 99

c. 04, 21, 76, 44

d. 89, 56, 34, 11

ANSWERS

- | | | | | | | | | | | | | | |
|-----|------------|-----|------------|-----|------------|-----|------------|-----|------------|-----|------------|-----|------------|
| 1. | (d) | 2. | (b) | 3. | (a) | 4. | (b) | 5. | (a) | 6. | (b) | 7. | (b) |
| 8. | (a) | 9. | (d) | 10. | (d) | 11. | (a) | 12. | (c) | 13. | (d) | 14. | (c) |
| 15. | (b) | 16. | (b) | 17. | (b) | 18. | (d) | 19. | (d) | 20. | (a) | 21. | (a) |
| 22. | (a) | 23. | (d) | 24. | (b) | 25. | (a) | | | | | | |